

**ATOMIC ENERGY CENTRAL SCHOOL, INDORE  
(PRIMARY)**

**WORKSHEET for cycle 8**

**Class: 1**

**Sub: Mathematics**

---

**Name:** \_\_\_\_\_ **Sec:** \_\_\_\_\_ **Roll No:** \_\_\_\_\_

**1) Arrange from smaller to greater.**

**a) 23, 76, 12, 89, 40**

**Ans:-** .....

**b) 90, 30, 10, 50, 20.**

**Ans:-** .....

**2) Arrange from greater to smaller.**

**a) 56, 65, 13, 31, 9**

**Ans:-** .....

**b) 78, 65, 34, 98, 100.**

**Ans:-** .....

**3) Solve these.**

**i) Arun has 12 crayons, he gave 4 to his friend. How many crayons are left with him?**

**ii) Gita has 9 marbles, her brother gave her 6 more marbles. How many marbles does she have in all?**

**iii) Sonu has 8 bananas, he ate 3 bananas. How many bananas are left with him?**

**iv) There are 16 flowers in the bunch, Minu took away 7 flowers. How many flowers are left in the bunch?**

4) Write the number name .

i) 23 ----- ii) 56 -----

iii) 12 ----- iv) 21 -----

v) 18 ----- vi) 40 -----

5) Write the numbers for ..

i) sixty five

ii) fifty six

iii) forty nine

iv) Hundred

v) eleven

vi) fourteen

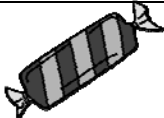
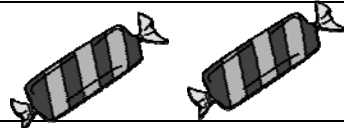






6) Write the numbers.

a) 4 tens and 9 ones =

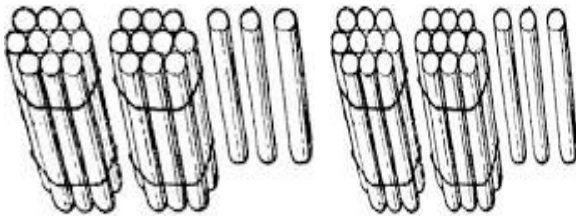
b) 8 ones =

c) 5 tens =

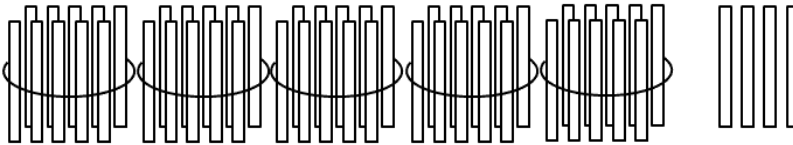
d) 3 ones and 7 tens =

Find the cost		Total cost
 1 rupee		
2 rupees 		
 20 rupees		
 5 rupees		

6) Write the correct number .



----- Tens and----- ones= -----



----- tens and ----- ones = -----

7) Write the number that comes after...

i) 67

ii) 76

iii) 89

iv) 40

v) 14

iv) 60

8) Write the numbers counting by twos

a) 11 , 13 , 15 , ----- , ----- , ----- , -----

b) 42 , 44 , 46 , ----- , ----- , ----- , -----

9) Complete the counting by fives.

a) 10 , 15 , 20 , ----- , ----- , ----- , -----

b) 21 , 26 , 31 , ----- , ----- , ----- , -----

10) Write the amount .



----- Rupees.



----- Rupees.